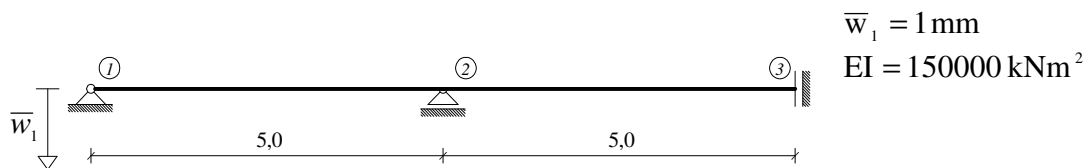
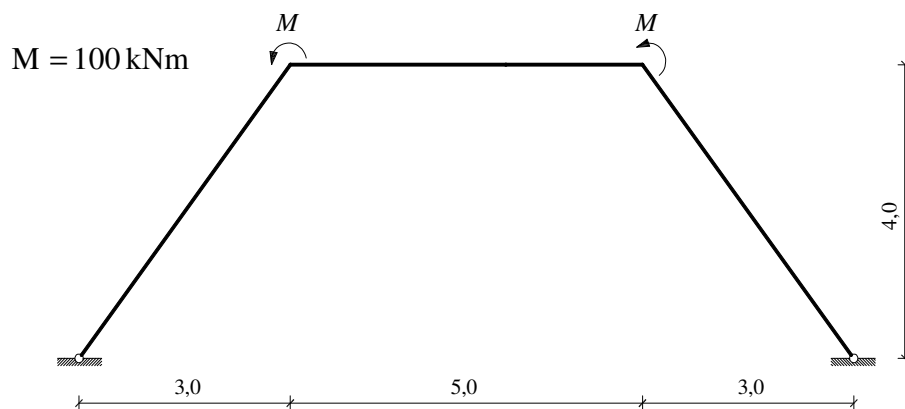


GS 2. - Kolokvij – (2012./2013.)

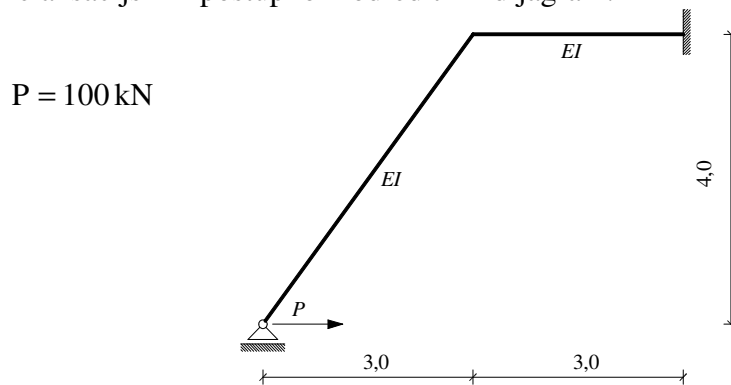
1. (25) Inženjerskom metodom pomaka izračunati zaokret osi nosača u točki 2.



2. (25) Primjenom simetrije i antimetrije odredite M dijagram.



3. (25) Relaksacijskim postupkom odrediti M dijagram.



4. (25) Kombinacijom postupaka Werner-Csonke i Crossa odredite M dijagram.

